

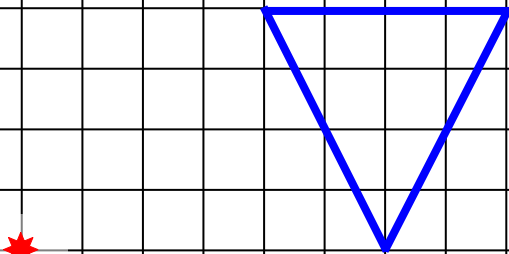
C1Helaethwch gan ddefnyddio Ffactor Graddfa o 2 o ganol yr helaethiad a ddangosir â *

A 20x20 grid with a blue square and a red star. The blue square is located in the lower-left quadrant, with its bottom-left corner at the intersection of the 10th vertical line and the 10th horizontal line. The red star is located at the intersection of the 5th vertical line and the 5th horizontal line.

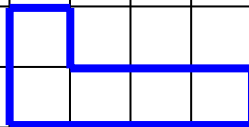
C2Helaethwch gan ddefnyddio Ffactor Graddfa o 2 o ganol yr helaethiad a ddangosir â *

A 20x20 grid with a blue right-angled triangle and a red star. The blue triangle is located in the lower-left quadrant, with its right-angle vertex at the intersection of the 10th vertical line and the 10th horizontal line. The red star is located at the intersection of the 5th vertical line and the 5th horizontal line.

C3 Helaethwch gan ddefnyddio Ffactor Graddfa o 2 o ganol yr helaethiad a ddangosir â 🌟



C4 Helaethwch gan ddefnyddio Ffactor Graddfa o 2 o ganol yr helaethiad a ddangosir â 🌟




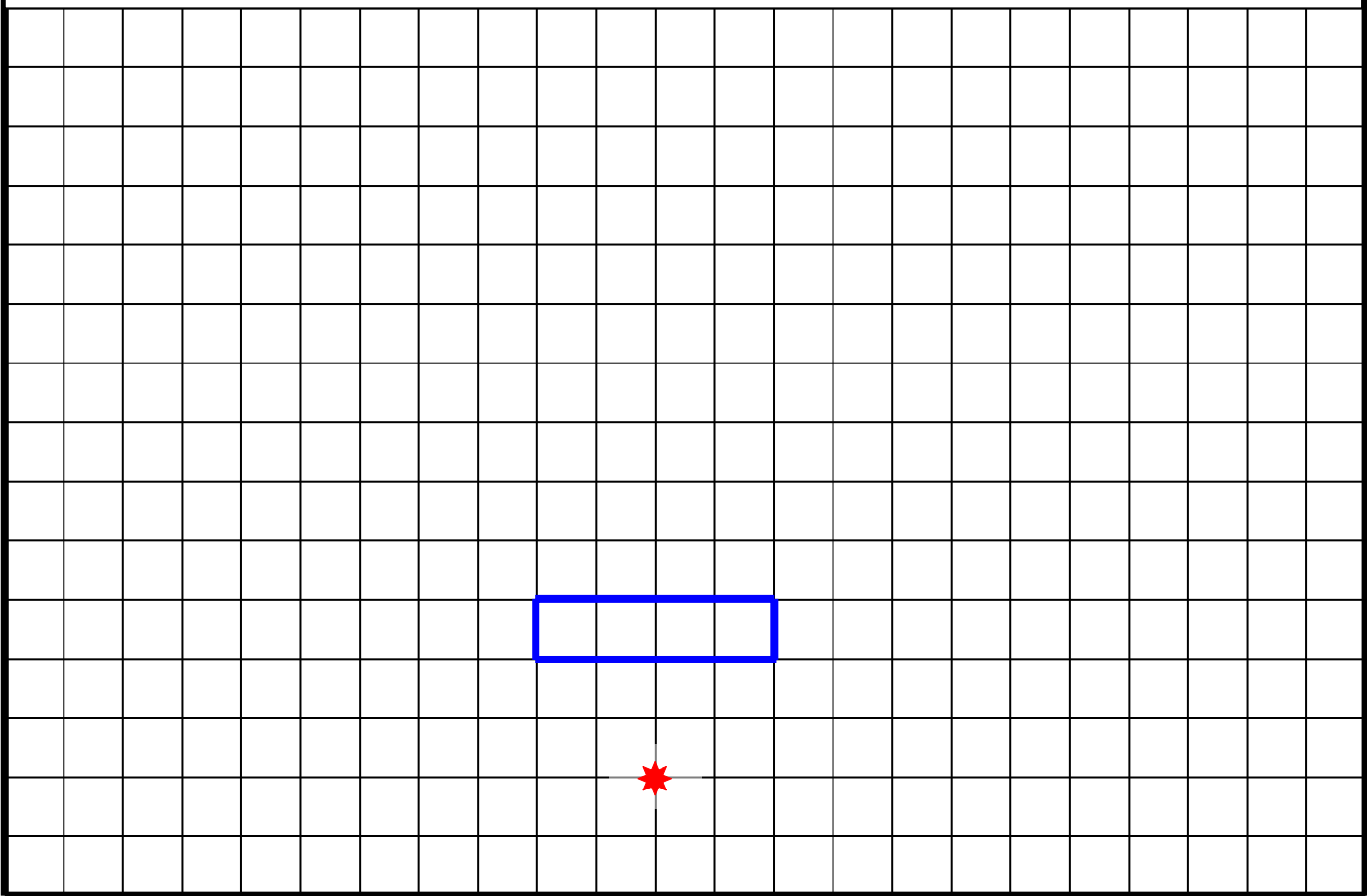
C5Helaethwch gan ddefnyddio Ffactor Graddfa o 3 o ganol yr helaethiad a ddangosir â *


A 20x20 grid with a blue rectangle and a red star. The rectangle is 3 units wide and 2 units high, with its bottom-left corner at (4, 12) and its top-right corner at (7, 14). The red star is located at (1, 8).

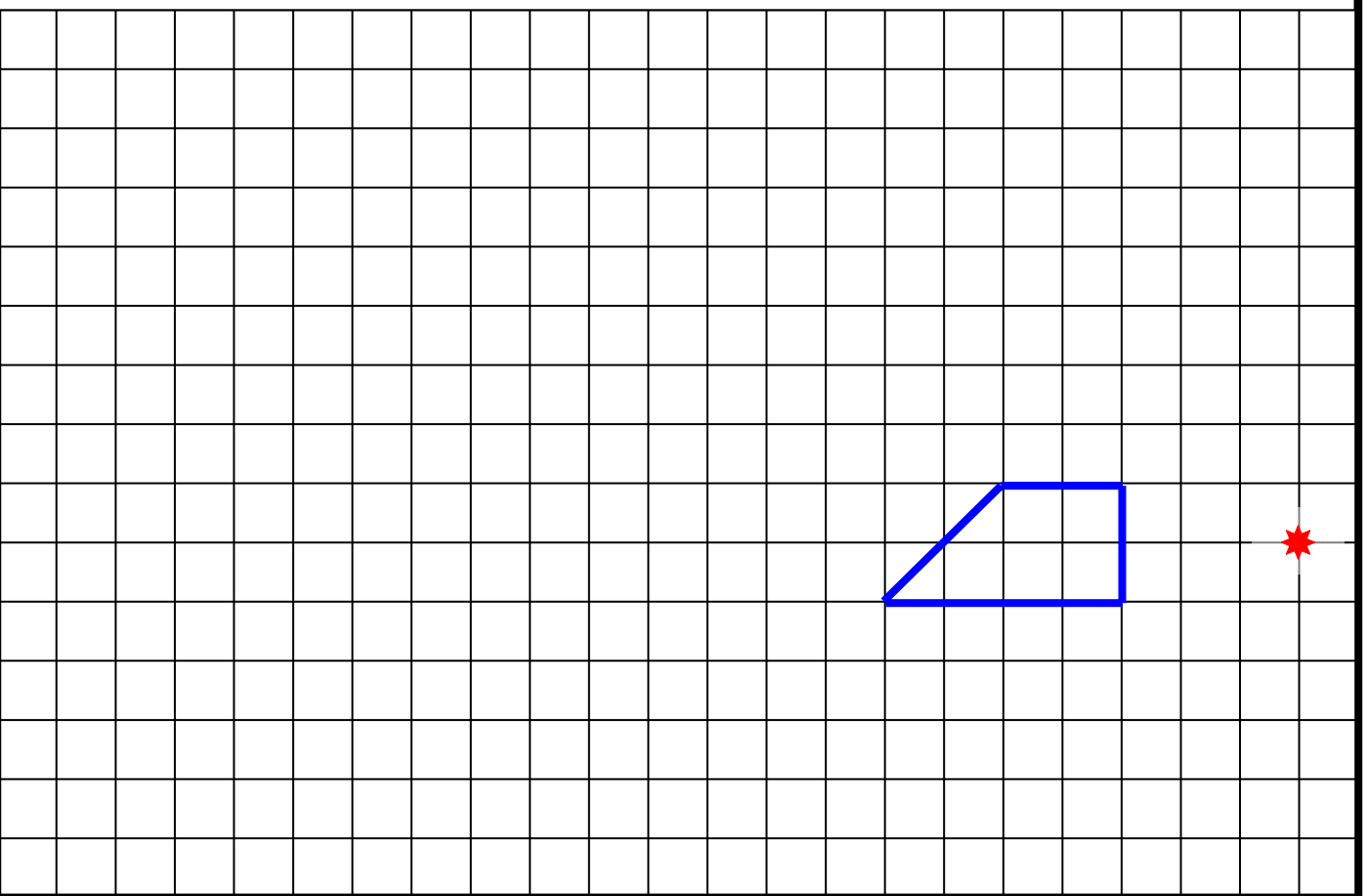
C6Helaethwch gan ddefnyddio Ffactor Graddfa o 3 o ganol yr helaethiad a ddangosir â *


A 20x20 grid with a blue right-angled triangle and a red star. The triangle has vertices at (4, 12), (4, 14), and (7, 14). The red star is located at (1, 8).

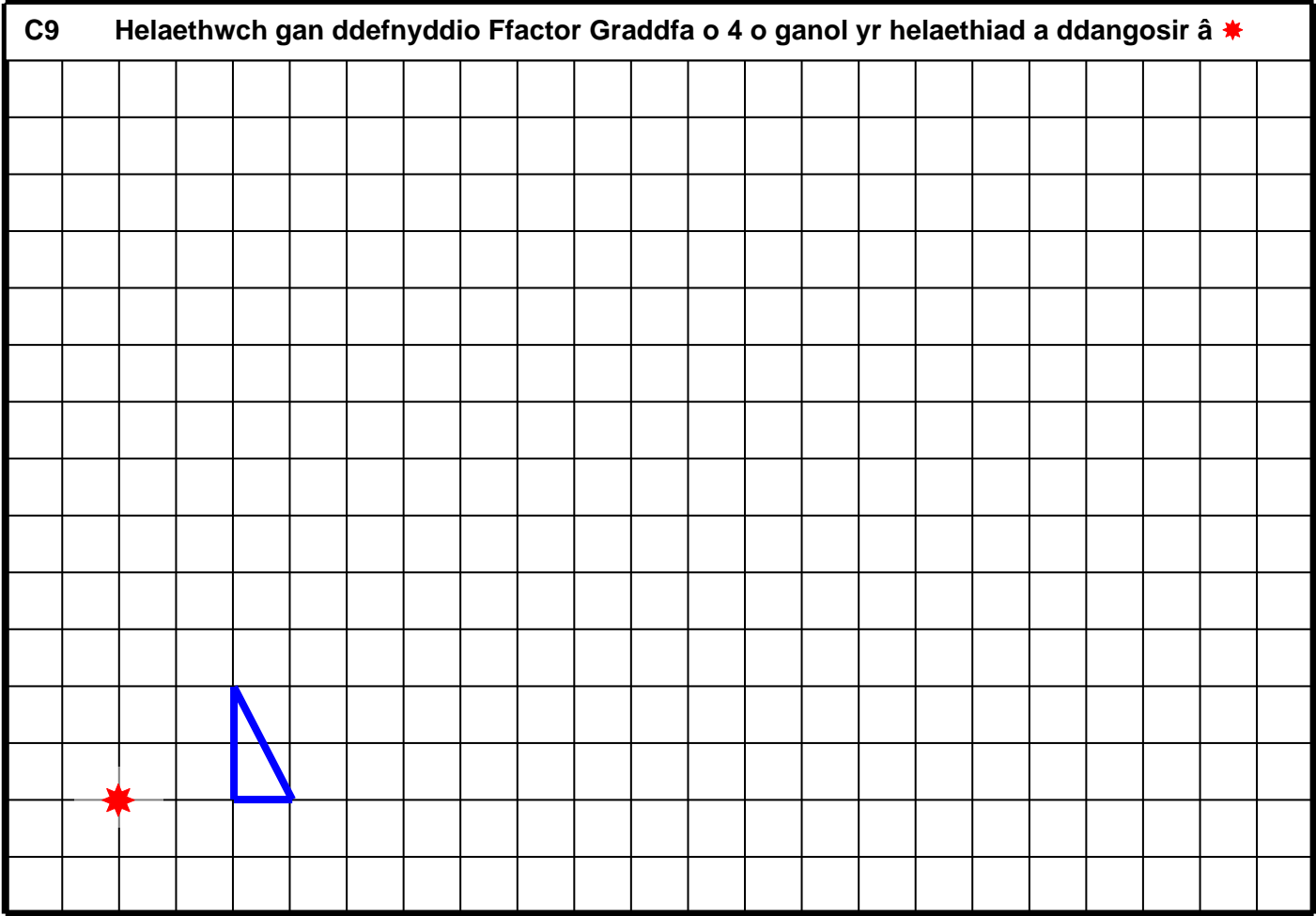
C7Helaethwch gan ddefnyddio Ffactor Graddfa o 3 o ganol yr helaethiad a ddangosir â 




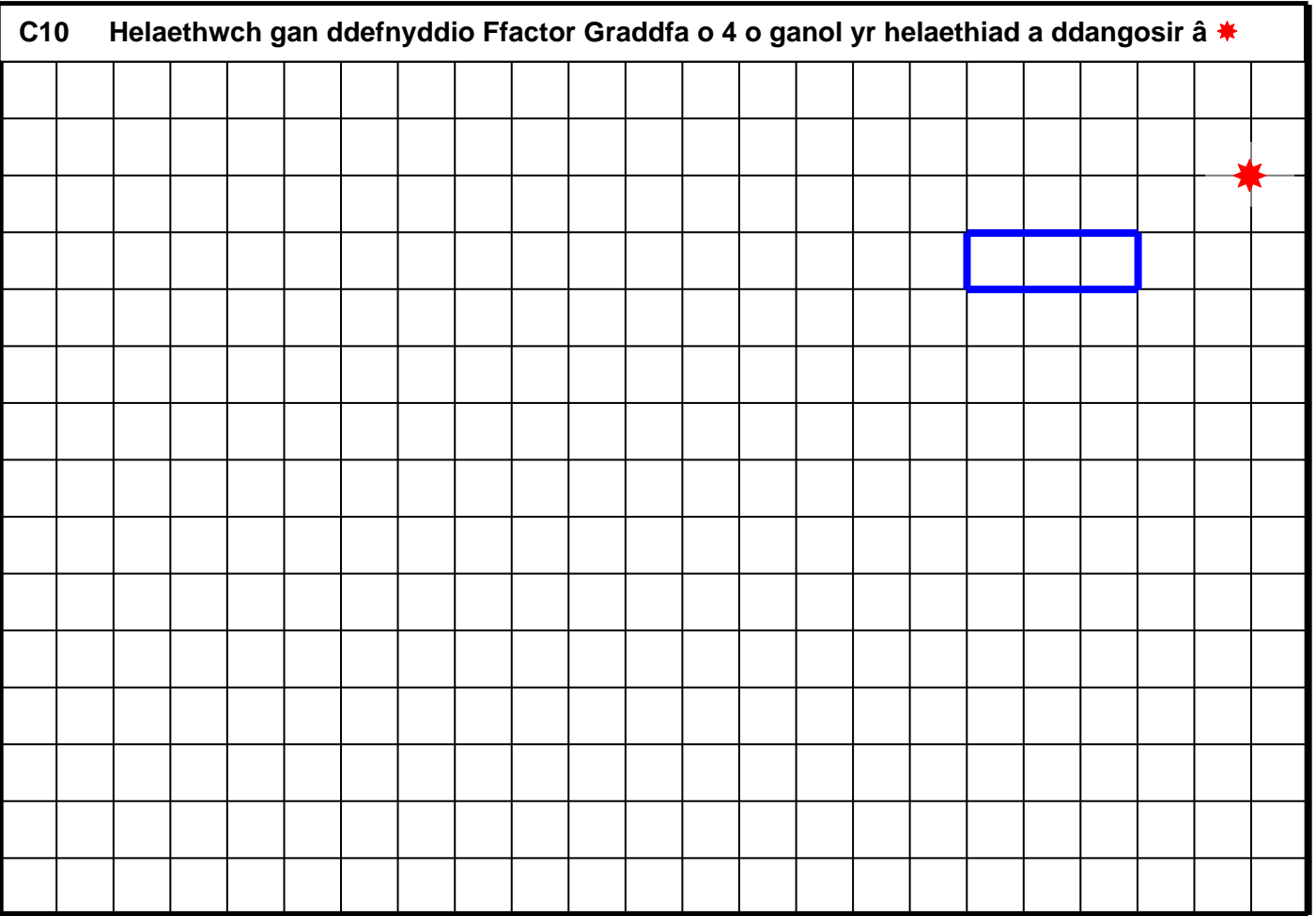
C8Helaethwch gan ddefnyddio Ffactor Graddfa o 3 o ganol yr helaethiad a ddangosir â 



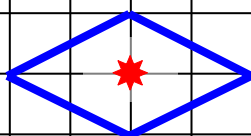
C9 Helaethwch gan ddefnyddio Ffactor Graddfa o 4 o ganol yr helaethiad a ddangosir â 



C10 Helaethwch gan ddefnyddio Ffactor Graddfa o 4 o ganol yr helaethiad a ddangosir â 



C11 Helaethwch gan ddefnyddio Ffactor Graddfa o 4 o ganol yr helaethiad a ddangosir â *



C12 Helaethwch gan ddefnyddio Ffactor Graddfa o 4 o ganol yr helaethiad a ddangosir â *

